


Adding with 10


What is the value of  in each picture?

1.




$$\underline{5} + 5 = 10$$

2.




$$\underline{\quad} + 1 = 10 + 1$$

3.




$$\underline{\quad} + 3 = 10 + 2$$

4.



$$\underline{\quad} + 2 + 2 = 10$$

5.



$$\underline{\quad} + 2 = 10$$

Introducing $>$ and $<$

Write $>$, $<$, or $=$.

1.

$$813 + 35 \bigcirc 813 + 36$$

2.

$$28 + 28 + 28 \bigcirc 82 + 82 + 82$$

3.

$$344 + 433 \bigcirc 432 + 345$$

4.

$$123 + 123 + 123 \bigcirc 345 + 345 + 345$$

5.

$$25 + 25 + 25 \bigcirc 25 + 25$$

6.

$$5 + 7 \bigcirc 50 + 50$$

Comparing Sums to Multiples of 10

Write $>$, $<$, or $=$.

1.

$$27 + 37 \bigcirc 60$$

2.

$$38 + 13 \bigcirc 40$$

3.

$$51 + 19 \bigcirc 70$$

4.

$$27 + 27 \bigcirc 60$$

5.

$$54 + 36 \bigcirc 70$$

6.

$$154 + 36 \bigcirc 170$$

Sums Greater than 20

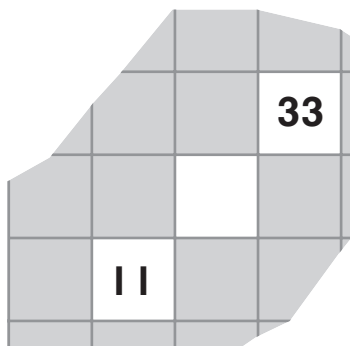
Which pairs have a sum greater than 20?
Circle them as fast as you can.

13 7	3 15	13 8	8 11	16 4	6 17	17 2	16 5	14 6
15 5	5 16	5 17	14 4	14 6	7 14	17 3	4 17	12 8
14 7	2 17	17 3	9 10	11 9	12 9	11 8	3 16	16 5
10 10	17 5	19 1	14 5	10 9	18 3	8 12	19 2	20 0
15 6	17 4	2 19	4 15	8 13	7 13	5 16	4 18	1 20
6 13	8 12	11 10	13 9	16 5	3 18	6 12	5 13	0 19

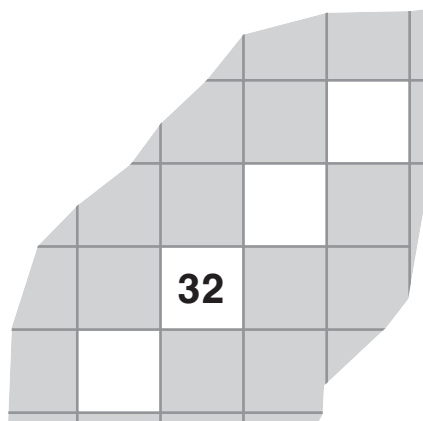
Adding and Subtracting with 10

What numbers are missing?
Use the patterns to help you.

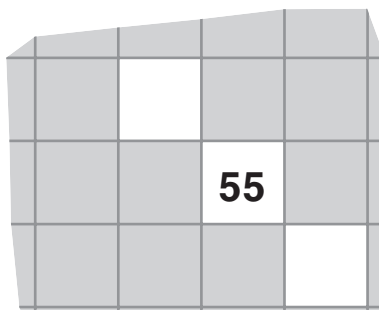
1.



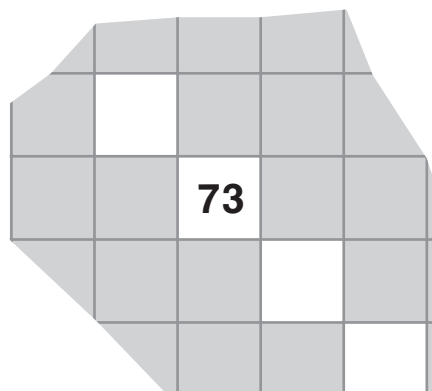
2.



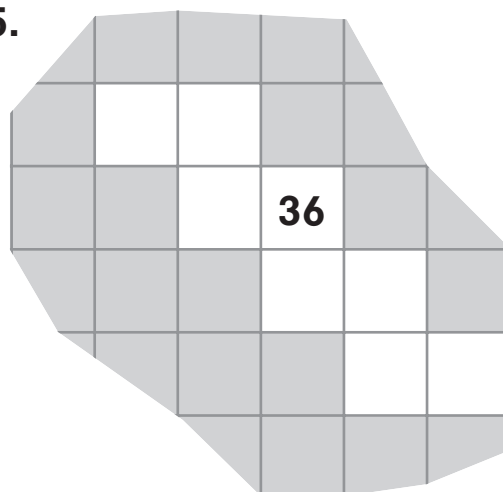
3.



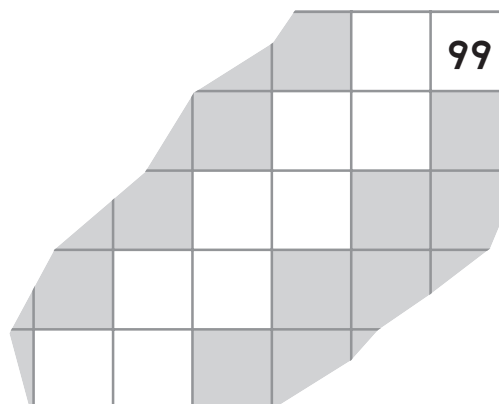
4.



5.



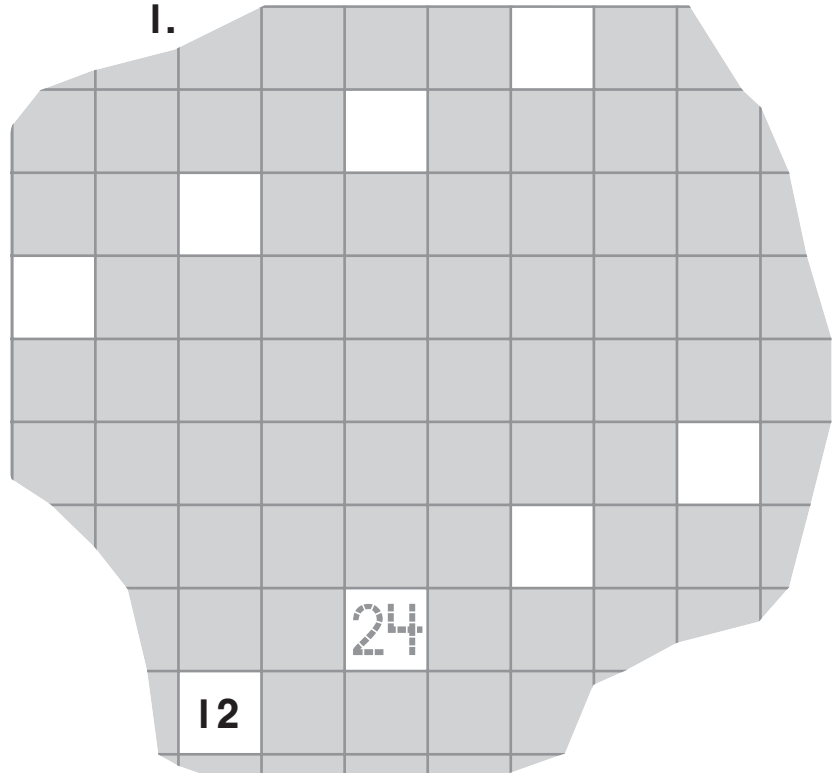
6.



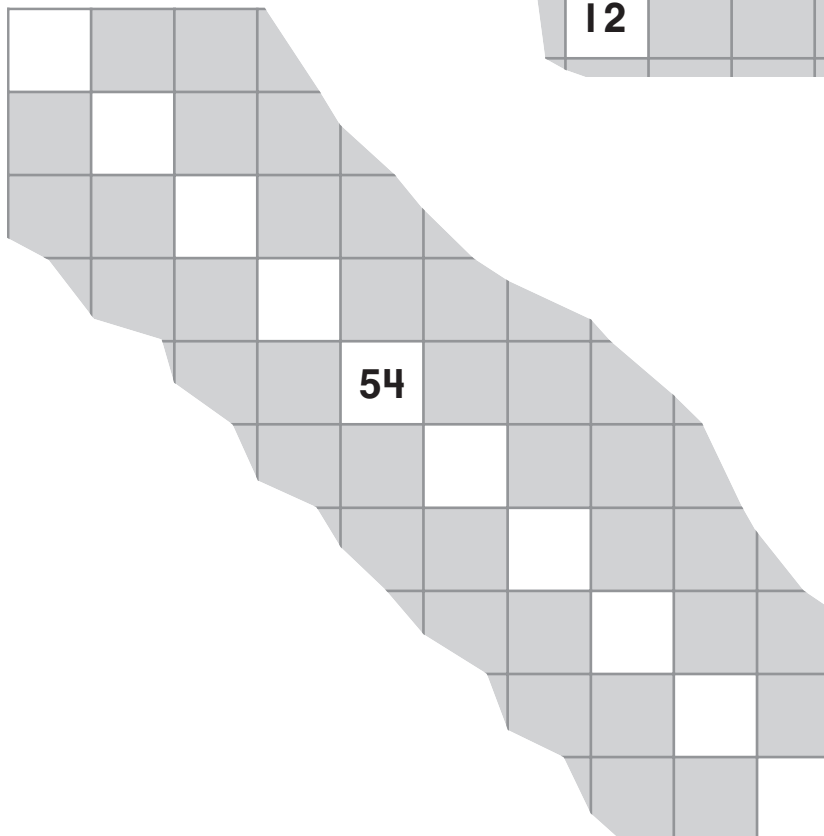
More Adding and Subtracting with 10

What is missing? Use the patterns to help you.

1.



2.



Adding Numbers Close to 10

Find each rule. Complete the table.

1.

<i>m</i>	0	8	3			26	91		109
	9	17		53	83			109	

2.

<i>k</i>	3	22	4	27	63		81		111
	14	33	15			59		111	

3.

<i>n</i>	24	33	51	45	90	82			79
	32	41	59				74	25	

Rounding to the Nearest 10

**Round to the nearest 10 to solve each problem.
Show your work.**

1. Carmen has 9 pennies. Her brother has a dime. About how much money do they have in all?

about _____ ¢

2. Bill has 32 stamps. A friend gives him 9 more. About how many stamps does Bill have now?

about _____ stamps

3. Mrs. Stein has a pack of 30 pencils. She gives 11 pencils to students. About how many does she have left?

about _____ pencils

4. Luis read for 19 minutes on Saturday. He read for 27 minutes on Sunday. About how long did he read in all?

about _____ minutes