

Exploring Time

About how long does each activity take?
Choose a time unit from the box.

Time Units	
seconds	hours
minutes	days

1. Kim and Ray go fishing at the town lake.
How long will they be gone?

hours

2. Seth's family is on a camping trip.
How long will they be gone?

3. Shiloh is brushing her teeth.
How long will it take?

4. Brian is putting on his socks.
How long will it take?

5. Sarah planted tomato seeds in her garden. How long until leaves grow?

6. Tim is sharpening his pencil.
How long will it take?


7. Sela flies on a plane across the U.S.
How long will the plane ride last?

8. Shari is blowing out the candles on a cake. How long will it take?


How Long Does It Take?

What is missing?


1. There are 2 very hungry monkeys. Each monkey eats 1 banana every minute.





Bananas Eaten By 2 Monkeys	
Time That Has Passed	Number of Bananas Eaten
20 minutes	40
30 minutes	
	100
1 hour	



2. Now there are 3 hungry monkeys. Each monkey eats 1 banana every minute.

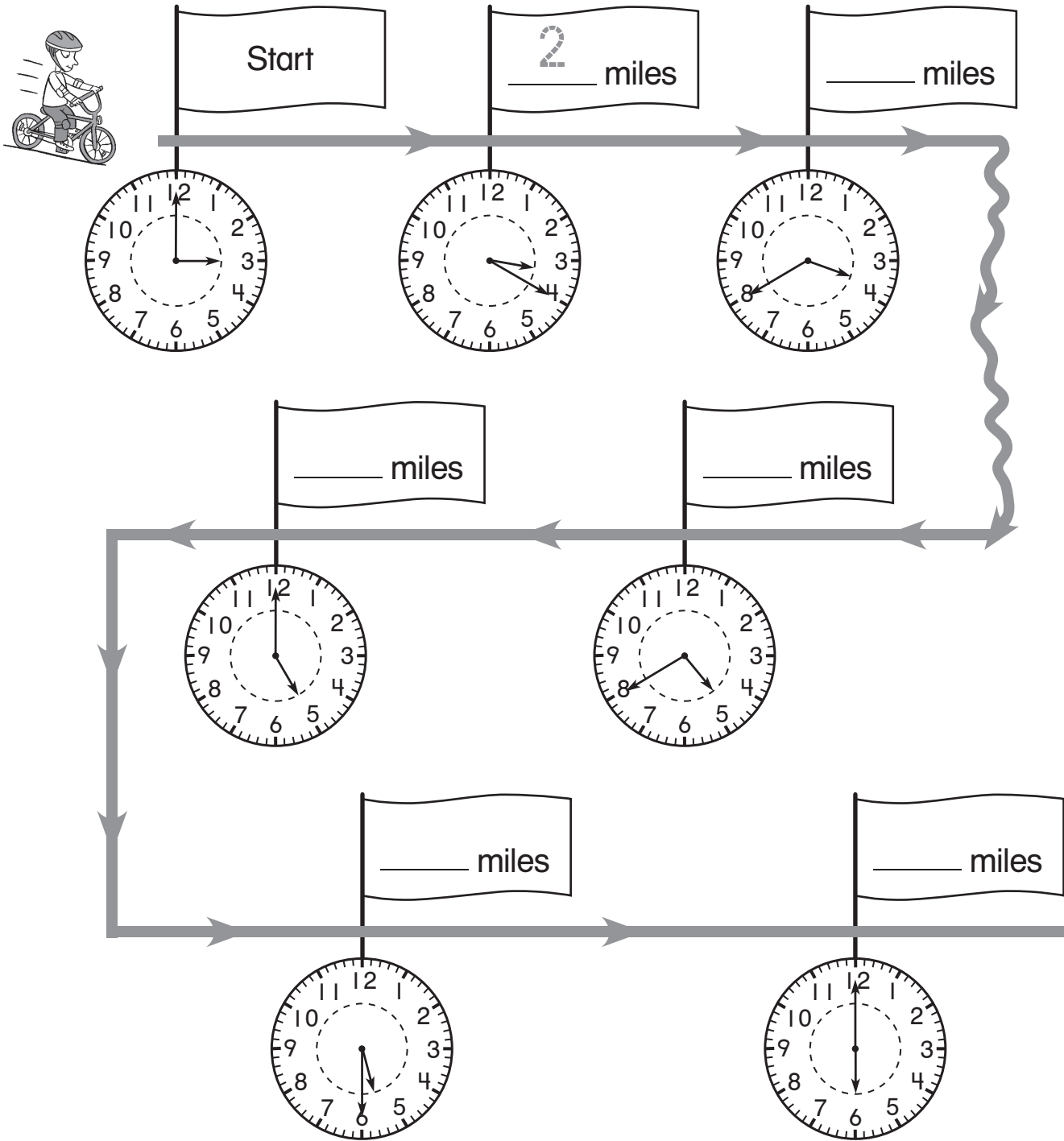


Bananas Eaten By 3 Monkeys	
Time That Has Passed	Number of Bananas Eaten
20 minutes	60
30 minutes	
1 hour	
1 hour and 10 minutes	


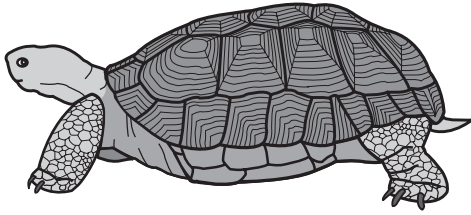


How Far?

Kyle rides his bike 1 mile every 10 minutes.
Look at the clocks and fill in the mile flags.



How Far? How Fast?



The tortoise walks 1 mile in 1 hour.

The hare runs 6 miles in 1 hour.



What is missing?

	Number of Hours	Miles Tortoise Walks	Miles Hare Runs
1.	a half	a half	3
2.	1		
3.	1 and a half		
4.	2		
5.	2 and a half		
6.		3	
7.	5		
8.			36

Telling Time to 5 Minutes

The speed reader reads 1 book every 5 minutes.
What is the total number of books and minutes for each time?


Start

 books minutes  books minutes

books minutes

12:00
Noon



12:15

 books minutes

books minutes

12:45

1:10

 books minutes  books minutes

1:40 **1:50**


End

Total Books Read


Telling Time to the Minute

Write numbers and draw clock hands to show each time.



1. 6 minutes past 6




2. 10 minutes to 12




3. 21 minutes after 9




4. 12 minutes to 2



5. 25 minutes to 5



6. a quarter past 10



Calendar and Ordinal Numbers

1. What is your favorite month? Write the name of the month and this year. Then fill in the dates. Use a calendar to help.

_____ , _____

Sunday	Monday	Tuesday	Wednesday	Thursday	Friday	Saturday

2. Circle a number. What date is it? _____

What day of the week is it? _____

3. Color the Wednesdays green. What dates did you color? _____

4. Color the last Monday yellow. Then go backward and color each 6th square yellow. Which dates did you color? _____

What pattern do you see in the yellow squares?
