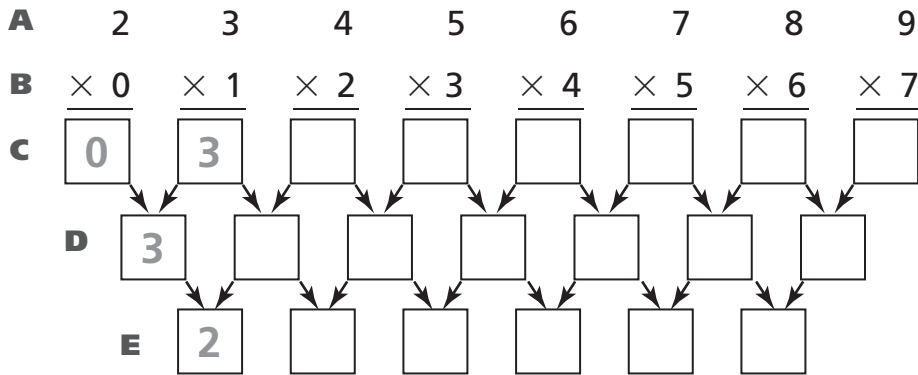


Number Puzzles

1 Complete the puzzle. Each number in rows D and E is the difference between the numbers in the two boxes above it.



2 What do you notice about the numbers in rows A and B?

3 What do you notice about the numbers in row D?



Test Prep

4 Multiplying 37 by multiples of 3 creates a pattern.

$37 \times 3 = 111$ $37 \times 6 = 222$ $37 \times 9 = 333$

Assuming the pattern continues, what is 37×24 ?

- A. 666
- B. 777
- C. 888
- D. 999

5 Explain how you found the answer.

Introducing Variables

1 Complete the puzzle.

		A	B	C	D	E	F
Think of a number.	⌘	2	8			1	
Add 3.	⌘ ...	5		15	10		
Triple the result.	⌘⌘⌘ ...						
Subtract 1.	⌘⌘⌘ ...						
Subtract the number you thought of first.	⌘⌘ ...						
Divide by 2.	⌘ ...						
Subtract the number you thought of first.	...						

© Education Development Center, Inc.



Test Prep

2 Tyken used squares to make the pattern shown.










How many squares are in the 10th figure in the pattern?

- A. 16
- B. 18
- C. 20
- D. 22

Introducing a Shorthand Notation

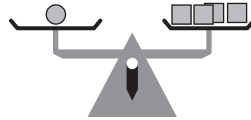
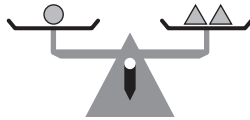
1 Complete the shorthand notation for this puzzle. Then figure out the numbers in each round of the puzzle.

Words	Pictures	Shorthand	A	B	C
Think of a number.		x	10	5	
Double it.		$2x$	20		
Double it again.					
Subtract the number you thought of first.					
Add 6.					30
Divide by 3.		$x + 2$			
Subtract the number you thought of first.					

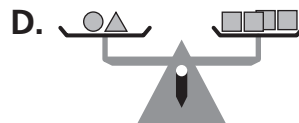
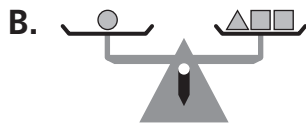
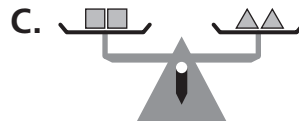
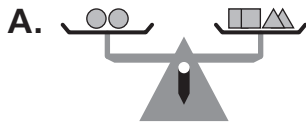


Test Prep

2 These scales are balanced.



Which scale is also balanced?



Using Shorthand Notation to Complete Number Puzzles

Fill in the missing numbers.

		A	B	C	D	E
1	Think of a number.	\otimes	12			
		$\otimes\otimes \dots$	30	14	6	40
						8

		F	G	H	I	J
2	Think of a number.	\otimes		6		
		$\otimes\otimes + 100$	138		220	150
						100

		K	L	M	N	O
3	Think of a number.	x			9	
		$5x + 75$	90	80	125	
						175

		P	Q	R	S	T
4	Think of a number.	x			15	
		$3x + 150$	225	150	300	
						240



Test Prep

5 If $x = 4$, what is $3x + 18$?

- A. 25
- B. 28
- C. 30
- D. 52

6 Explain how you found the solution to $3x + 18$.

Using Square Numbers to Remember Other Multiplication Facts

Complete the diagrams and number sentences.

1

$4 \times 4 = \square$ $3 \times 5 = \bigcirc$

2

$5 \times 5 = \square$ $4 \times 6 = \bigcirc$

3

$14 \times 14 = \square$ $13 \times 15 = \bigcirc$

4

$20 \times 20 = \square$ $19 \times 21 = \bigcirc$



Test Prep

5 Which equation matches this table?

A	8	12	76
B	16	24	152

- A.** $A \times 3 = B$ **C.** $A + 10 = B$
B. $A + 3 = B$ **D.** $A \times 2 = B$

6 Explain how you found the right equation.

Generalizing a Multiplication Pattern

Complete the number sentence.

1

$7 \cdot 7 = \square$

$6 \cdot 8 = \bigcirc$

2

$11 \cdot 11 = \square$

$10 \cdot 12 = \bigcirc$

3

$(5 \cdot 5) - 1 = \square$

$4 \cdot 6 = \bigcirc$

4

$(10 \cdot 10) - 1 = \square$

$9 \cdot 11 = \bigcirc$

5

$(12 \cdot 12) - 1 = \square$

$11 \cdot 13 = \bigcirc$

6

$(15 \cdot 15) - 1 = \square$

$14 \cdot 16 = \bigcirc$

7

$(\square \cdot \square) - 1 = 399$

$19 \cdot 21 = \bigcirc$

8

$(\square \cdot \square) - 1 = 3,599$

$59 \cdot \bigcirc = 3,599$



Test Prep

- 9 About how long will an alligator be when it's 10 years old?

- A. 10 feet C. 6 feet
B. 8 feet D. 2 feet

GROWTH RATE OF ALLIGATORS

Years 1–5	1 foot per year
Years 6–15	3 inches per year