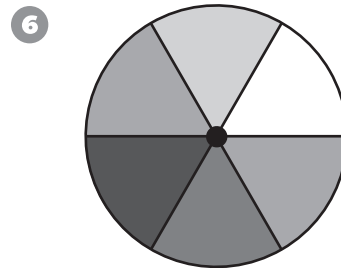
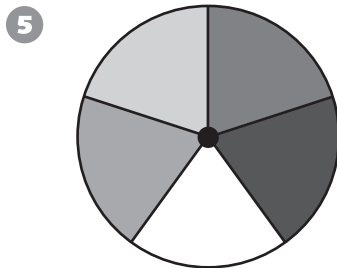
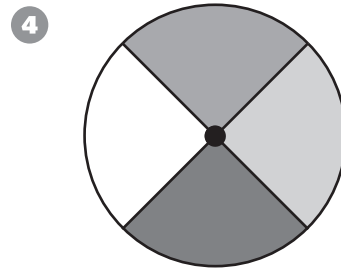
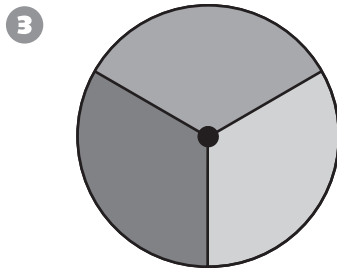
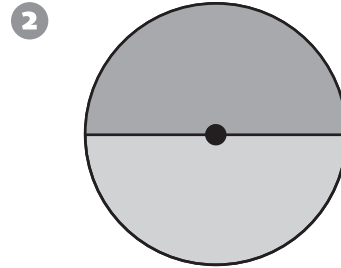
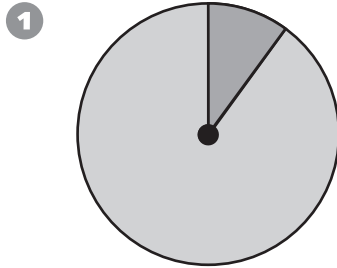
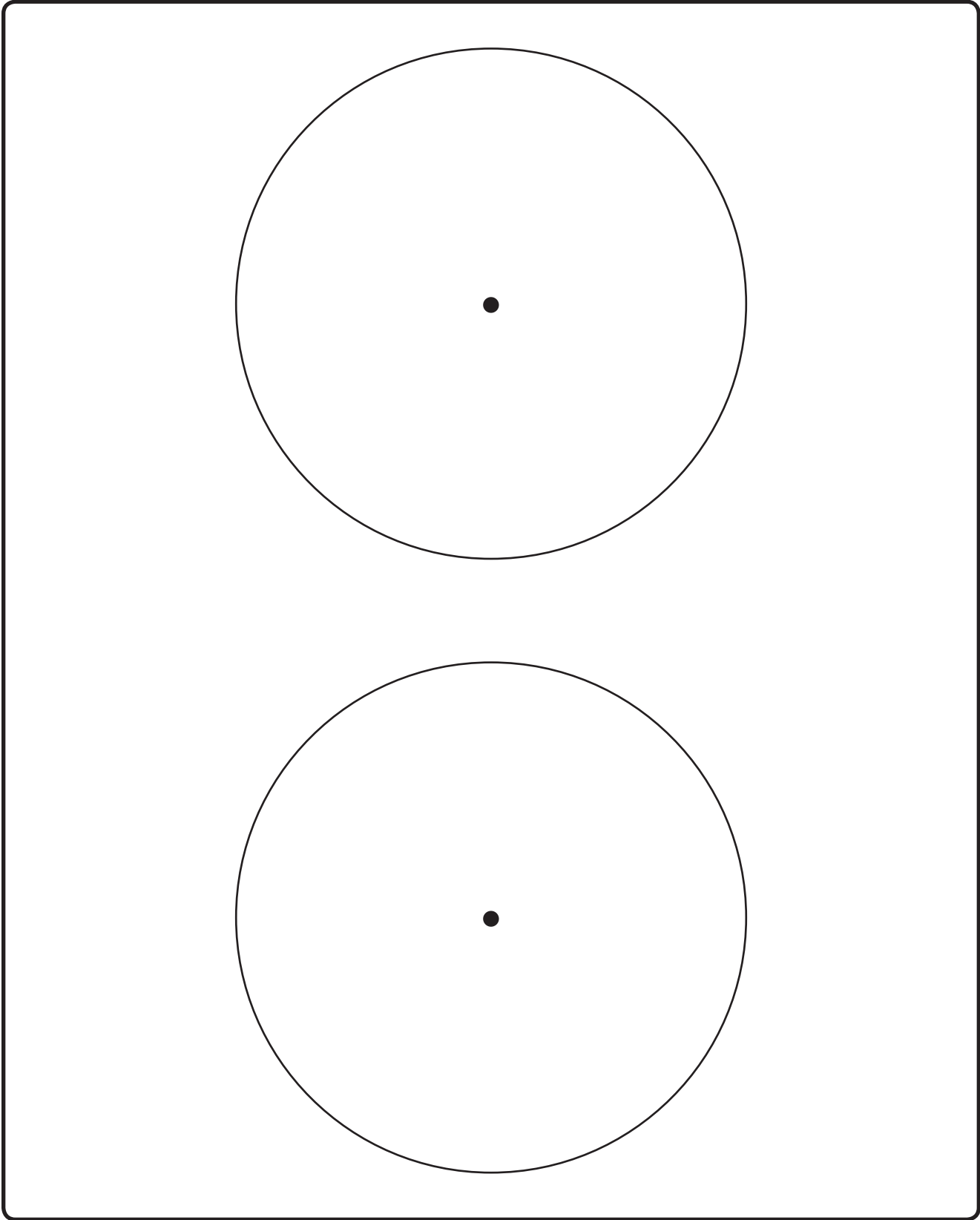


# Spinner Bases



Name \_\_\_\_\_ Date \_\_\_\_\_

# Blank Spinners



# 3-Person Spin

Player 1	Player 2	Player 3
_____	_____	_____

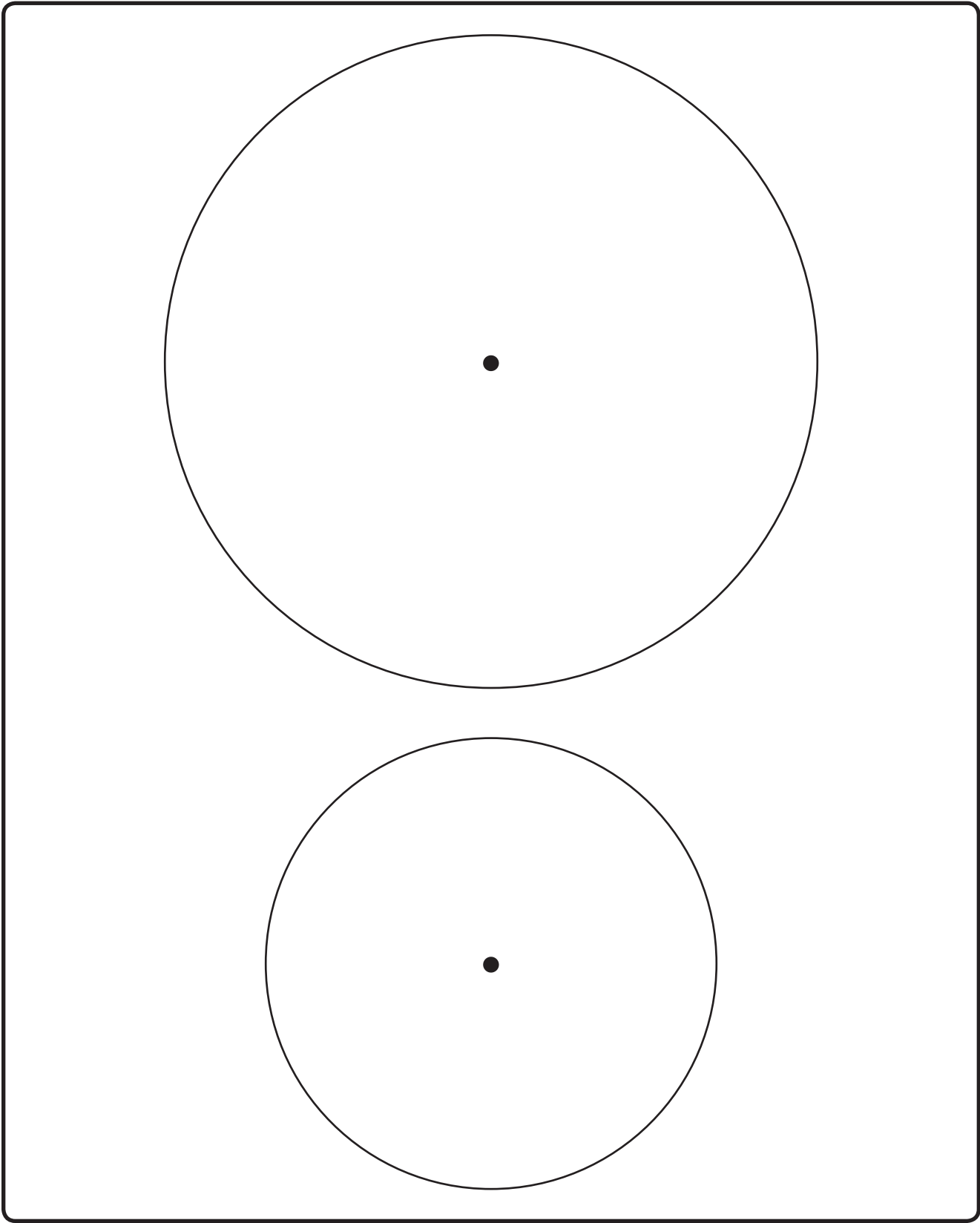
Who won your game?

\_\_\_\_\_

Was your spinner fair?

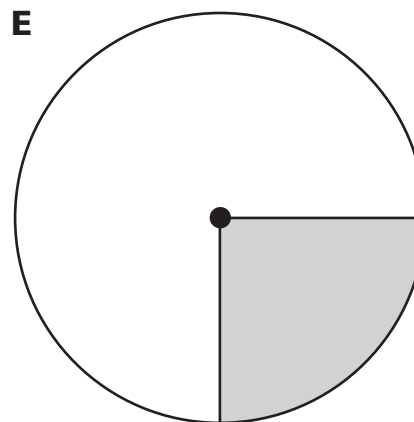
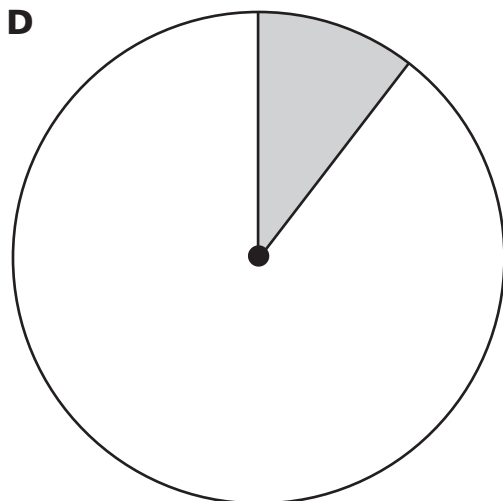
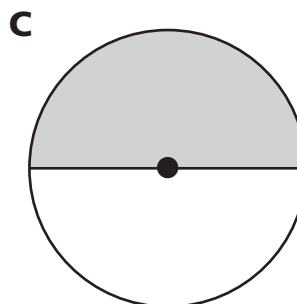
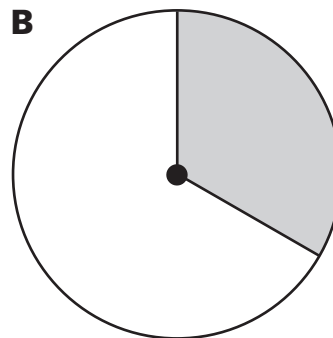
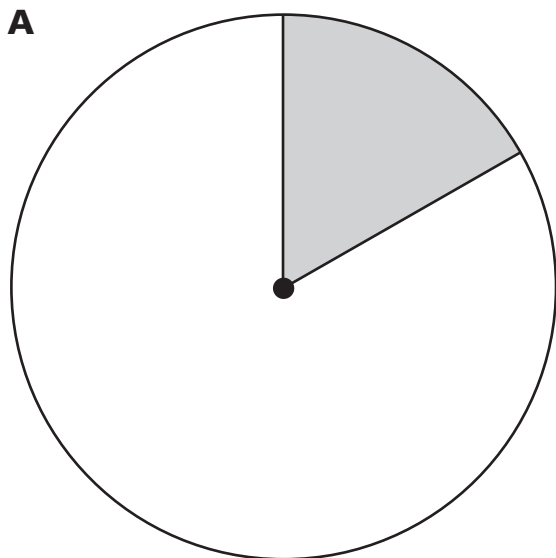
\_\_\_\_\_

# Two Blank Spinners



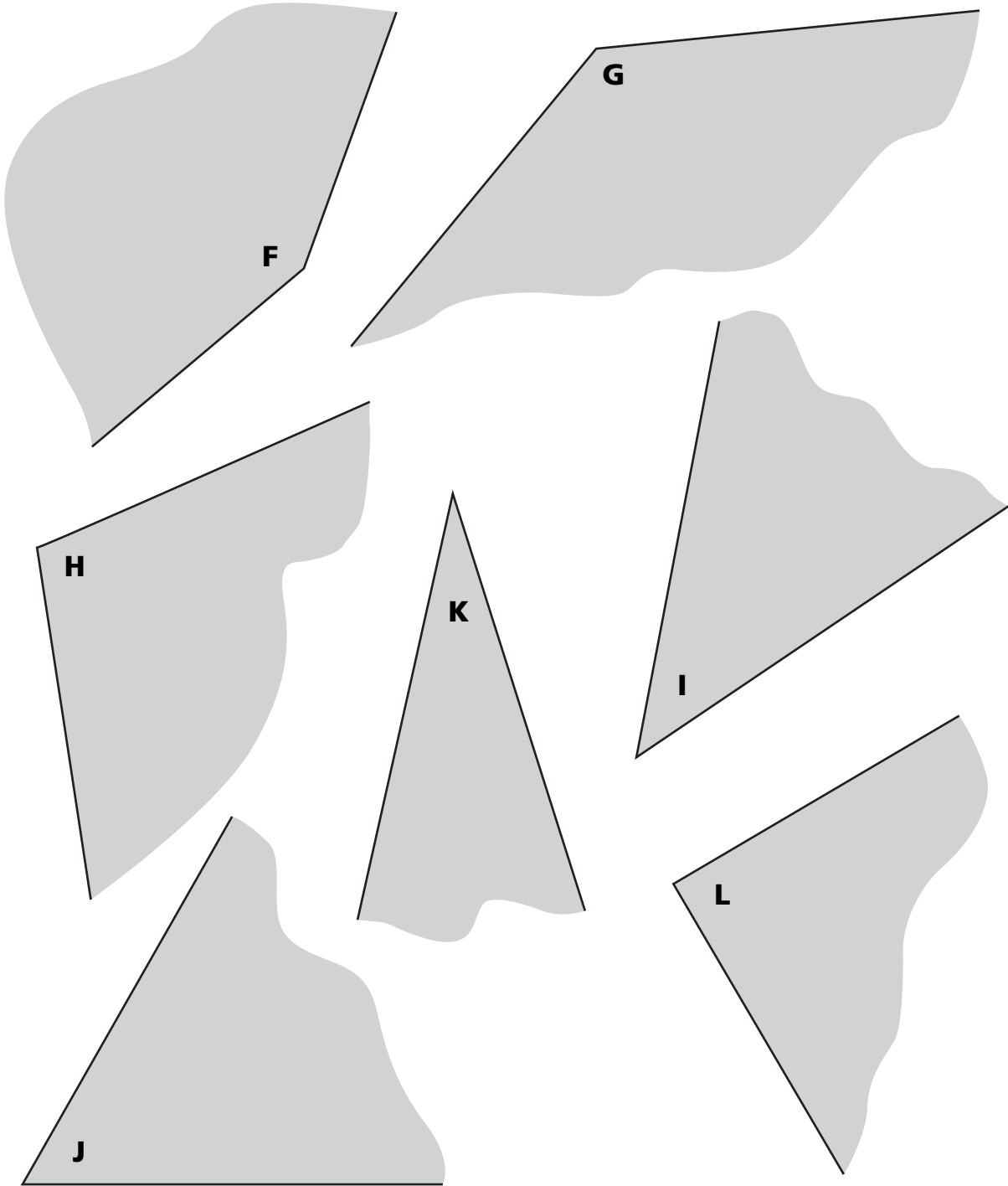
# Spinners from LAB page 63

Cut out these spinners and use them to complete LAB page 63, if needed.



# Angles from LAB page 64

Cut out these shapes and use them to complete LAB page 64, if needed.



# Making Triangles with Equal Sides

1 Use paper strips to make two different triangles with no equal sides.

- A Can you make an **acute** triangle?
  - B Can you make a **right** triangle?
  - C Can you make an **obtuse** triangle?
- 

2 Now make two different triangles with exactly 2 equal sides.

- A Can you make an **acute** triangle?
  - B Can you make a **right** triangle?
  - C Can you make an **obtuse** triangle?
- 

3 Now make two different triangles with 3 equal sides.

- A Can you make an **acute** triangle?
- B Can you make a **right** triangle?
- C Can you make an **obtuse** triangle?

# Classifying Triangles

	Acute	Right	Obtuse
Scalene 0 equal sides			
Isosceles 2 equal sides			
Equilateral 3 equal sides			



Name \_\_\_\_\_ Date \_\_\_\_\_

# Figure Bingo


© Education Development Center, Inc.

# Bingo Figures




# Bingo Cards


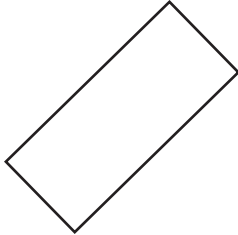

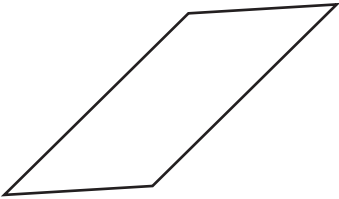
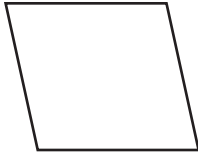
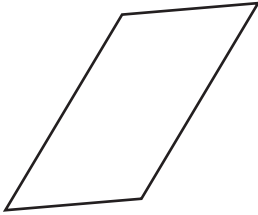


Right and scalene triangle	Has 0 angles	Isosceles and obtuse triangle	Has 6 angles	Parallel lines
Obtuse and scalene triangle	Acute and scalene triangle	Straight line	Right and isosceles triangle	Acute angle
Equilateral triangle	Obtuse angle	1 acute angle and 1 obtuse angle	Acute and isosceles triangle	2 pairs of parallel sides
All equal angles	4 right angles	Right angle	Perpendicular lines	Non-perpendicular intersecting lines
1 pair of parallel sides	2 right angles	Acute and equilateral triangle	All equal sides	No straight sides

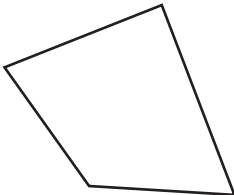
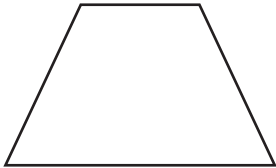

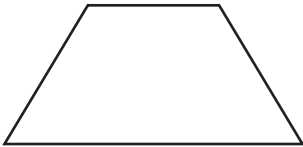
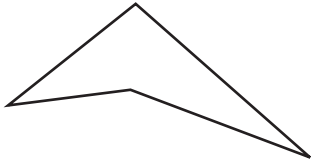
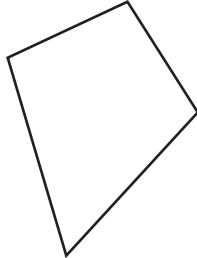
# Sorting Quadrilaterals: Parallelograms

**All of these belong: Parallelograms**



**None of these belong.**

# Sorting Quadrilaterals: Trapezoids

**All of these belong: Trapezoids**



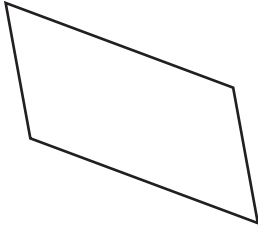
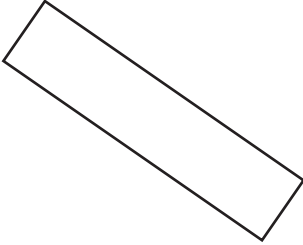

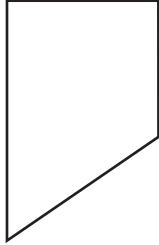



**None of these belong.**

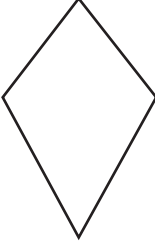

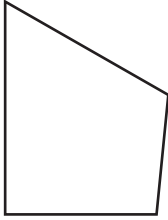
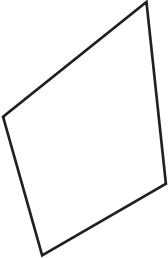
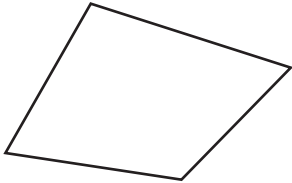


# Sorting Quadrilaterals: Parallel Sides

**All of these belong: Parallel sides**

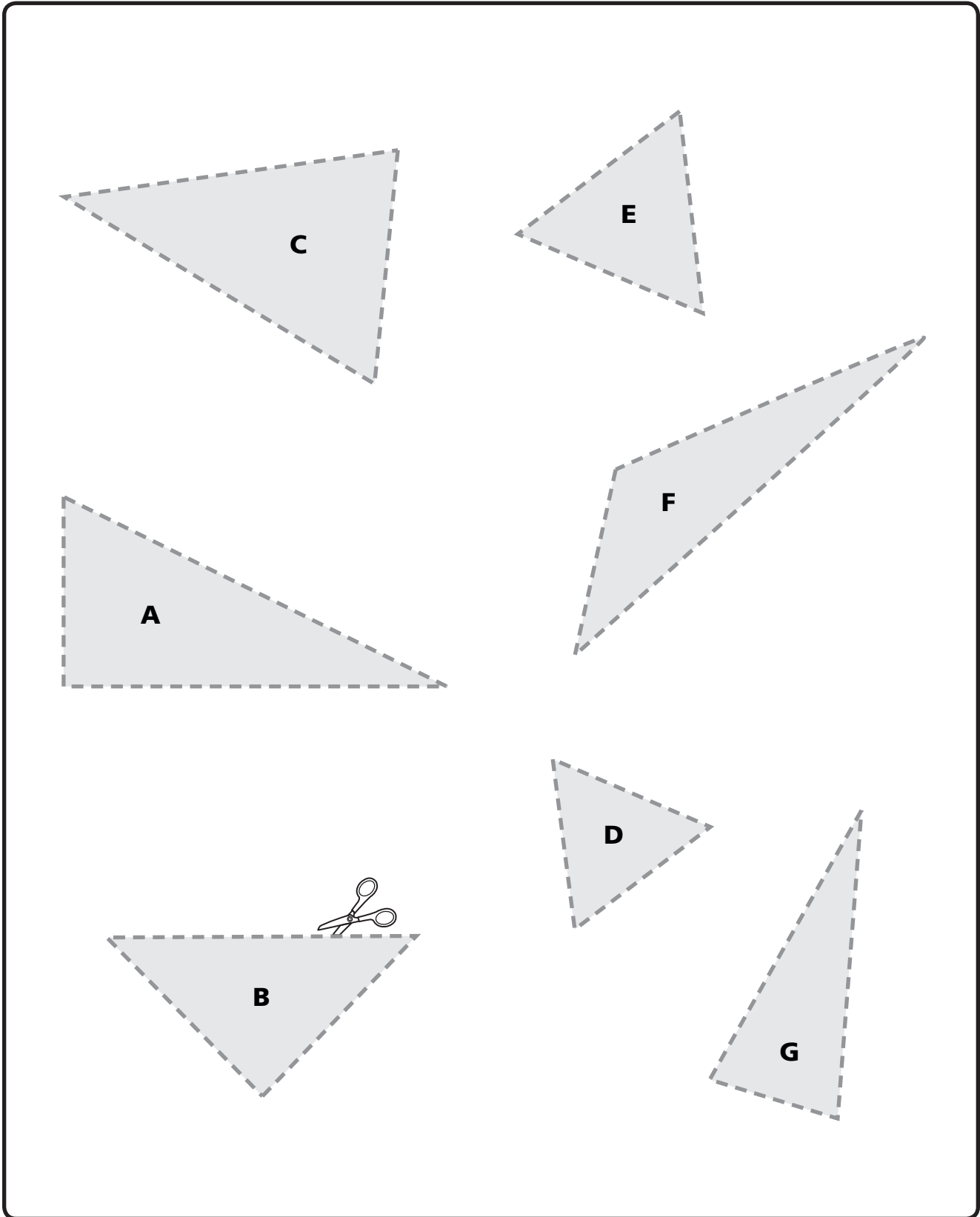


**None of these belong.**

# Triangles



# Who Has . . . Game, Page 1



<p>I have PERPENDICULAR LINES.</p> <p>Who has a shape with no straight lines?</p>	<p>I have a PENTAGON.</p> <p>Who has lines that never intersect?</p>	<p>I have a SCALENE TRIANGLE.</p> <p>Who has an angle formed by perpendicular lines?</p>
<p>I have a RECTANGLE.</p> <p>Who has a triangle with three lines of symmetry?</p>	<p>I have a CIRCLE.</p> <p>Who has an angle that is larger than a right angle but is not a straight angle?</p>	<p>I have PARALLEL LINES.</p> <p>Who has a triangle with two equal sides?</p>
<p>I have a RIGHT ANGLE.</p> <p>Who has a quadrilateral with two pairs of parallel sides?</p>	<p>I have an EQUILATERAL TRIANGLE.</p> <p>Who has a shape with four straight sides that are all connected?</p>	<p>I have an OBTUSE ANGLE.</p> <p>Who has a rectangle with four equal sides?</p>
<p>I have an ISOSCELES TRIANGLE.</p> <p>Who has a parallelogram with four equal sides?</p>	<p>I have a PARALLELOGRAM.</p> <p>Who has a shape with five straight sides that are all connected?</p>	<p>I have a QUADRILATERAL.</p> <p>Who has a triangle with a right angle?</p>



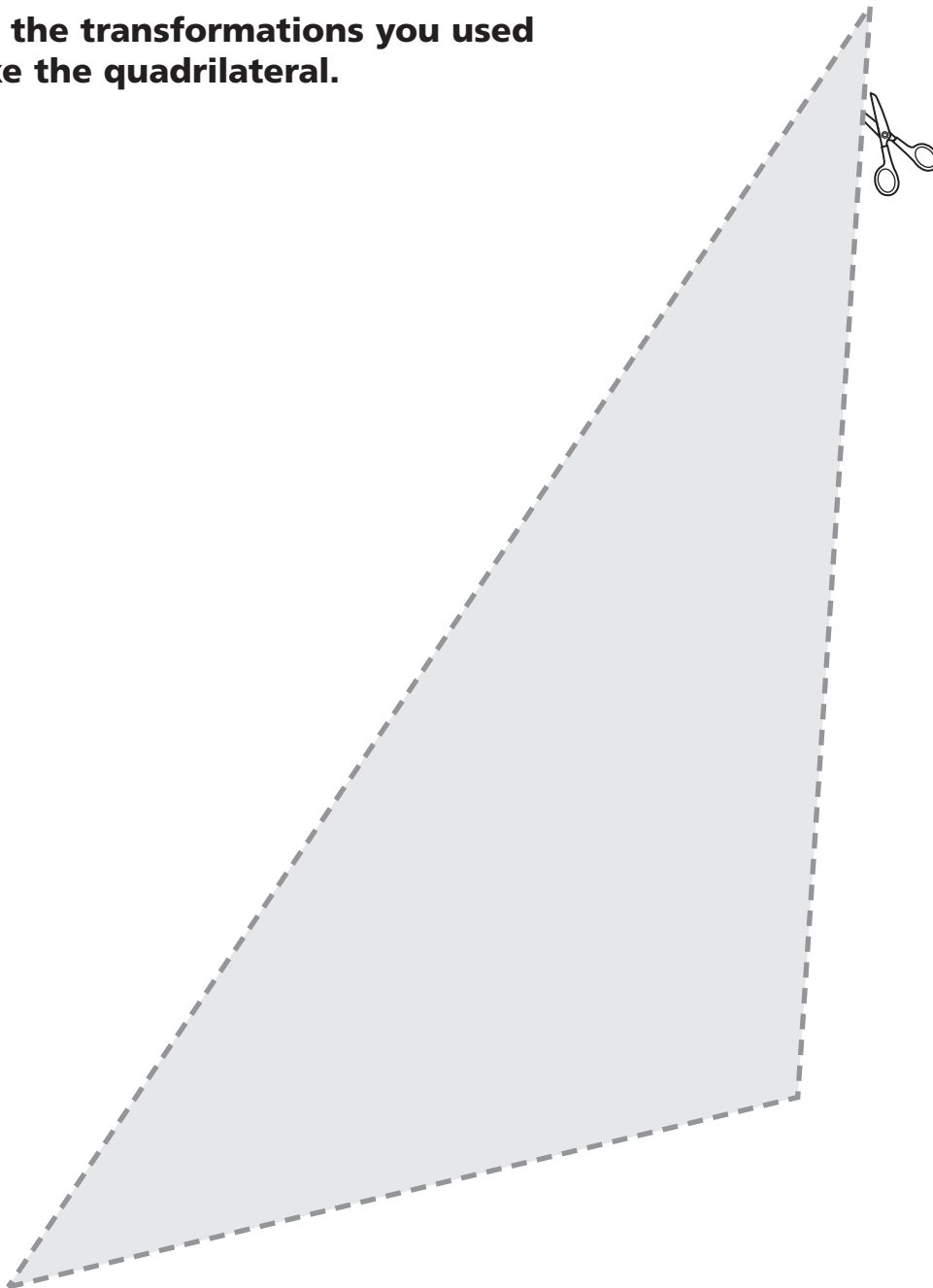
# Who Has . . . Game, Page 2



<p>I have a <b>SQUARE.</b></p> <p>Who has a straight angle?</p>	<p>I have a <b>RHOMBUS.</b></p> <p>Who has a shape with six lines of symmetry?</p>	<p>I have a <b>HEXAGON.</b></p> <p>Who has an angle that is less than a right angle?</p>
<p>I have a <b>RIGHT TRIANGLE.</b></p> <p>Who has a closed shape with three straight sides and no extra lines or points?</p>	<p>I have a <b>STRAIGHT LINE.</b></p> <p>Who has a triangle whose angles are all smaller than a right angle?</p>	<p>I have a <b>POLYGON.</b></p> <p>Who has shapes that exactly match?</p>
<p>I have an <b>ACUTE ANGLE.</b></p> <p>Who has a quadrilateral with exactly one pair of parallel sides?</p>	<p>I have a <b>TRIANGLE.</b></p> <p>Who has a triangle with an angle larger than a right angle?</p>	<p>I have an <b>ACUTE TRIANGLE.</b></p> <p>Who has a closed shape with straight sides?</p>
<p>I have <b>CONGRUENT SHAPES.</b></p> <p>Who has a triangle with sides of all different lengths?</p>	<p>I have a <b>TRAPEZOID.</b></p> <p>Who has a parallelogram with right angles?</p>	<p>I have an <b>OBTUSE TRIANGLE.</b></p> <p>Who has lines that intersect at right angles?</p>

# Non-Symmetric Triangle

- Cut out this triangle.
- Trace it on a piece of paper.
- Rotate, reflect, or translate it to make a quadrilateral.
- Record the transformations you used to make the quadrilateral.



# Shapes from LAB Page 77

