

Making Sums of 100

Write the missing numbers.

 boxes can contain only ones from 0 to 9.

 boxes can contain only tens from 0 to 90.

1.
$$\begin{array}{r} 27 \\ +73 \\ \hline \end{array}$$

27	20	7
73	70	3

2.
$$\begin{array}{r} 66 \\ +34 \\ \hline \end{array}$$

66	60	6
34	30	4

3.
$$\begin{array}{r} 48 \\ +52 \\ \hline \end{array}$$

48	40	8
52	50	2

4.
$$\begin{array}{r} 71 \\ +29 \\ \hline \end{array}$$

71	70	1
29	20	9

5.
$$\begin{array}{r} 35 \\ +65 \\ \hline \end{array}$$

35	30	5
65	60	5


6.
$$\begin{array}{r} 13 \\ +87 \\ \hline \end{array}$$

13	10	3
87	80	7


Adding with Coins

Show four different collections of coins equal to 1 quarter. Write an addition sentence for each one.


Draw **Q**, **D**, **N**, and **P** for the coins.

1. 

$$1 \text{ Q} = 2 \text{ D} +$$

2. 

$$1 \text{ Q} =$$

3. 

$$1 \text{ Q} =$$

4. 

$$1 \text{ Q} =$$

Patterns in Money

At the Post Office, you can buy stamps for different amounts. What is missing in each price list?

1.

Price List for 3¢ Stamps						
Number of Stamps	1	2		4		6
Total Cost	3¢		9¢			

2.

Price List for 4¢ Stamps						
Number of Stamps	1		3	4		
Total Cost	4¢		12¢			

3.

Price List for 5¢ Stamps						
Number of Stamps	1		3	4		
Total Cost	5¢		15¢			

4.


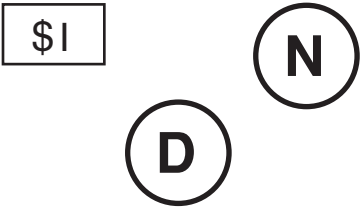


Price List for 10¢ Stamps						
Number of Stamps	1		3	4		
Total Cost	10¢		30¢			

5. Sunil needs to mail a letter. It will cost 45¢. What stamps can he put on the letter to make exactly 45¢?

--

Place Value in Money

What is missing?

	Fewest Coins and Dollars	Number of Pennies	Dollars and Cents
1.		36	\$0.36
2.			\$1.15
3.		123	
4.			
5.		245	
6.			

Computing with Money

I have a \$5.00 bill. How much change do I get after each purchase?

1. My item costs \$4.85. I pay \$5.00.

My change is _____.

2. My item costs \$3.20. I pay \$5.00.

My change is _____.

3. My item costs \$0.34. I pay \$5.00.

My change is _____.

4. My item costs \$1.99. I pay \$5.00.

My change is _____.

5. My item costs \$1.45. I pay \$5.00. Then I see another item that costs \$2.50.

My change is _____.

Write each sum.

6.
$$\begin{array}{r} \$2.01 \\ + \$3.23 \\ \hline \$ \quad . \end{array}$$

7.
$$\begin{array}{r} \$5.36 \\ + \$2.43 \\ \hline \$ \quad . \end{array}$$

8.
$$\begin{array}{r} \$4.09 \\ + \$2.75 \\ \hline \$ \quad . \end{array}$$

Adding Two-Digit Numbers

What is missing?

1.

40		45
	8	38
70	13	

2.

	2	22
	9	19
30	11	

3.

60		67
	3	13
70	10	

4.

30		36
	6	36
60	12	

5.

		25
		59
70	14	

6.

		87
		7
80	14	

Subtracting Two-Digit Numbers

What is missing?

1.

43	10	53
	5	35
		18

2.

80	17	97
	9	79
		18

3.

73	10	83
	8	48
33		35

4.

30	6	36
	6	36
		0

5.

75	9	84
		59
		25

6.

80	7	87
		7
		80

Exploring Expanded Notation

What is missing?

1. $28 = \underline{20} + \underline{\quad}$

2. $97 = \underline{\quad} + \underline{\quad}$

3. $504 = \underline{\quad} + \underline{\quad}$

4. $540 = \underline{\quad} + \underline{\quad}$

5. $123 = \underline{\quad} + \underline{\quad} + \underline{\quad}$

6. $637 = \underline{\quad} + \underline{\quad} + \underline{\quad}$

7.

100			123
	30	7	637
700	50	10	



	1	2	3
+	6	3	7
<hr/>			

8.

500	30	10	540
100	20		123
			417



	5	4	0
-	1	2	3
<hr/>			

Mental Math with Three-Digit Numbers

Add and subtract 243 in pieces.

1.

n	301	640	426	587
$n + 200$	501			
$n + 240$	541			
$n + 243$	544			

2.

n	301	640	426	587
$n - 200$	101			
$n - 240$	61			
$n - 243$	58			

Adding Two- and Three-Digit Numbers

What is each sum?

$$\begin{array}{r} 1. \quad 187 \\ + 102 \\ \hline \end{array}$$

$$\begin{array}{r} 2. \quad 530 \\ + 266 \\ \hline \end{array}$$

$$\begin{array}{r} 3. \quad 237 \\ + 56 \\ \hline \end{array}$$

$$\begin{array}{r} 4. \quad 345 \\ + 345 \\ \hline \end{array}$$

$$\begin{array}{r} 5. \quad 202 \\ + 389 \\ \hline \end{array}$$

$$\begin{array}{r} 6. \quad 278 \\ + 602 \\ \hline \end{array}$$

$$\begin{array}{r} 7. \quad 758 \\ + 19 \\ \hline \end{array}$$

$$\begin{array}{r} 8. \quad 382 \\ + 75 \\ \hline \end{array}$$

9. Which two numbers in the box have a sum of about 600?

_____ and _____

123

337

209

480

Write a number sentence to solve the problem.

10. Kip has 426 baseball cards. Marisol has 451 baseball cards. How many cards do they have together?

_____ + _____ = _____ cards

Subtracting Two- and Three-Digit Numbers

What is each difference?

1.

8	7	0
—		
4	3	5
—————		

800	60	10	870
			435
			435

2.

3	6	9
—		
2	7	9
—————		

200	160	9	369
			279
			90

<p>3. $\begin{array}{r} 789 \\ -721 \\ \hline \end{array}$</p>	<p>4. $\begin{array}{r} 474 \\ -111 \\ \hline \end{array}$</p>	<p>5. $\begin{array}{r} 900 \\ -48 \\ \hline \end{array}$</p>	<p>6. $\begin{array}{r} 622 \\ -420 \\ \hline \end{array}$</p>
<p>7. $\begin{array}{r} 406 \\ -295 \\ \hline \end{array}$</p>	<p>8. $\begin{array}{r} 333 \\ -109 \\ \hline \end{array}$</p>	<p>9. $\begin{array}{r} 720 \\ -270 \\ \hline \end{array}$</p>	<p>10. $\begin{array}{r} 215 \\ -25 \\ \hline \end{array}$</p>

Practice Adding and Subtracting

What is each sum or difference?

$$\begin{array}{r} 1. \quad 419 \\ + 59 \\ \hline \end{array}$$

$$\begin{array}{r} 2. \quad 602 \\ + 274 \\ \hline \end{array}$$

$$\begin{array}{r} 3. \quad 356 \\ - 247 \\ \hline \end{array}$$

$$\begin{array}{r} 4. \quad 645 \\ - 171 \\ \hline \end{array}$$

$$\begin{array}{r} 5. \quad 560 \\ + 241 \\ \hline \end{array}$$

$$\begin{array}{r} 6. \quad 311 \\ - 107 \\ \hline \end{array}$$

$$\begin{array}{r} 7. \quad 582 \\ + 156 \\ \hline \end{array}$$

$$\begin{array}{r} 8. \quad 739 \\ - 65 \\ \hline \end{array}$$

$$\begin{array}{r} 9. \quad 222 \\ + 105 \\ \hline \end{array}$$

$$\begin{array}{r} 10. \quad 222 \\ - 105 \\ \hline \end{array}$$

$$\begin{array}{r} 11. \quad 745 \\ + 81 \\ \hline \end{array}$$

$$\begin{array}{r} 12. \quad 745 \\ - 81 \\ \hline \end{array}$$

13. Use each of the digits 1, 4, and 5 once.

Make the biggest number. _____

Make the smallest number. _____

Find the sum.

$$\begin{array}{r} \square \\ + \square \\ \hline \square \end{array}$$

Find the difference.

$$\begin{array}{r} \square \\ - \square \\ \hline \square \end{array}$$