

# How Many Are Hidden?

We have \_\_\_\_\_ counters.

I see

hidden

total

_____		_____		_____
-----	+	-----	=	-----
_____		_____		_____

---

_____		_____		_____
-----	+	-----	=	-----
_____		_____		_____

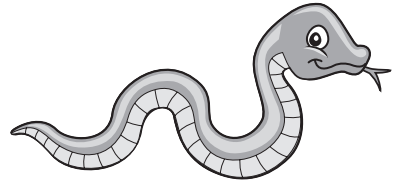
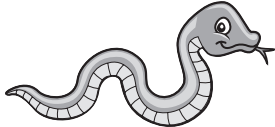
---

_____		_____		_____
-----	+	-----	=	-----
_____		_____		_____

---

_____		_____		_____
-----	+	-----	=	-----
_____		_____		_____

# Growing a Snake

 $0$  $+$  $=$  $+$  $=$  $+$  $=$  $+$  $=$

# Spending Money



---


$$\square \text{¢} - \square \text{¢} = \square \text{¢}$$

---


$$\square \text{¢} - \square \text{¢} = \square \text{¢}$$



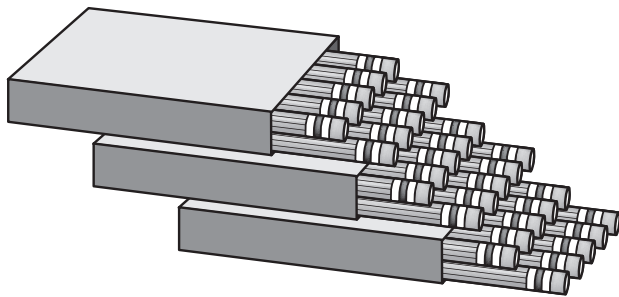

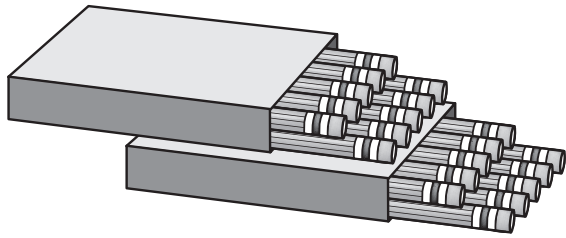

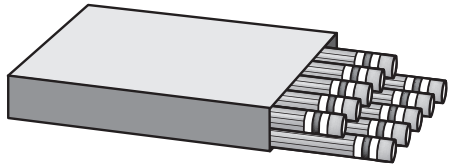
---


$$\square \text{¢} - \square \text{¢} = \square \text{¢}$$

---


$$\square \text{¢} - \square \text{¢} = \square \text{¢}$$

# Pencil Boxes



# Comparing Quantities

A ○ B

B ○ C

C ○ D

A ○ C

B ○ D

D ○ A

# Number Road 50 to 100

100

90 91 92 93 94 95 96 97 98 99

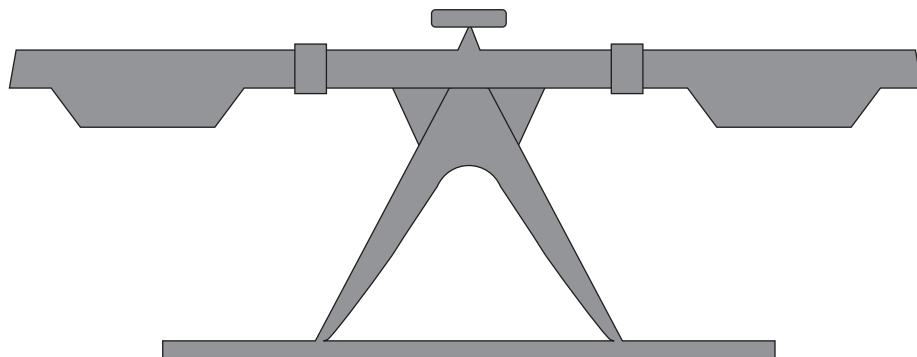
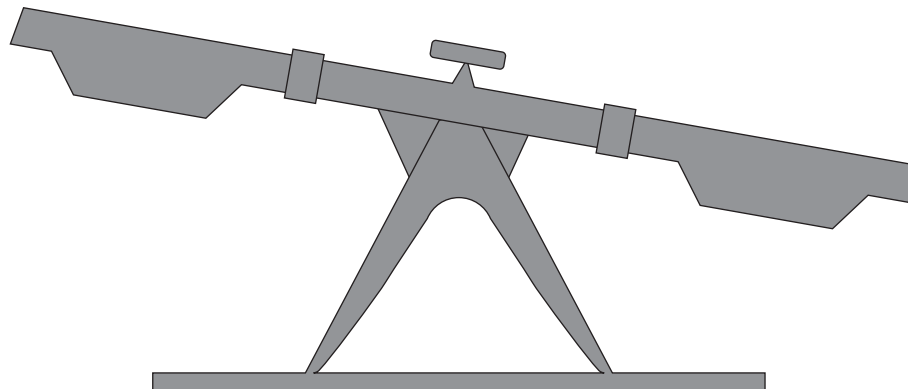
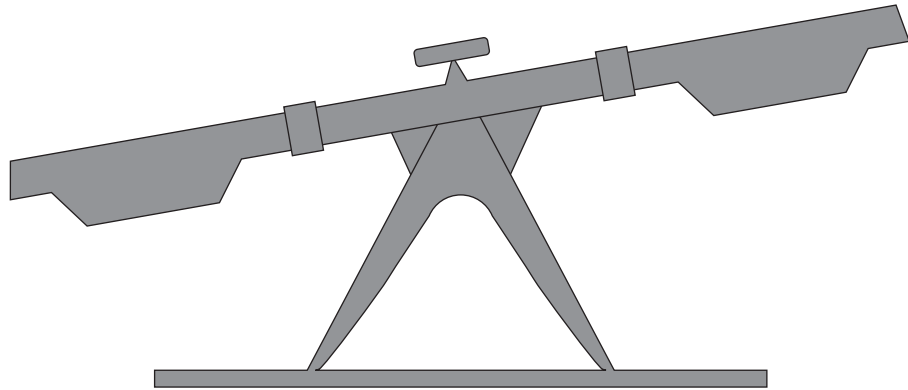
80 81 82 83 84 85 86 87 88 89

70 71 72 73 74 75 76 77 78 79

60 61 62 63 64 65 66 67 68 69

50 51 52 53 54 55 56 57 58 59

# Balance Scales




# Adding Beads

$$3 \text{ (circle)} + 4 \text{ (cube)} + \boxed{\phantom{00}} \text{ (cylinder)} = 10 \text{ beads}$$



$$\boxed{\phantom{00}} \text{ (circle)} + 2 \text{ (cube)} + 5 \text{ (cylinder)} = 10 \text{ beads}$$





# The 7¢ Maze

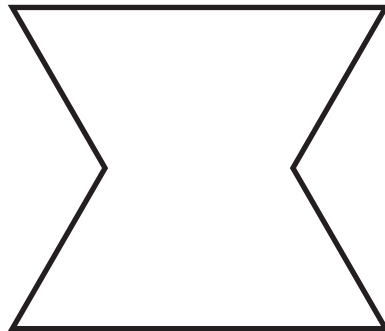


**Start**

A large maze is contained within a rectangular border. The maze consists of a single path that winds through various turns and dead ends. At the top right corner of the maze, there is a wedge of Swiss cheese. The word 'End' is written vertically next to the cheese. Scattered throughout the maze are ten 7-cent coins, each featuring a profile of a person.

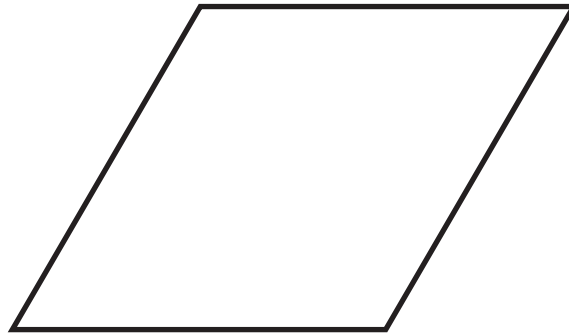
**End**

# Pattern Block Outline 15



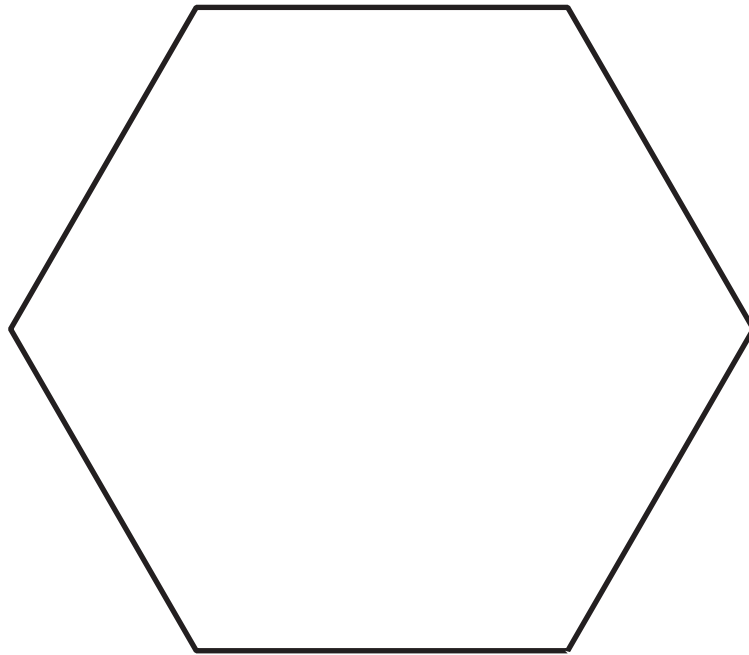
I used  blocks.

# Pattern Block Outline 16



I used  blocks.

# Pattern Block Outline 17



I used  blocks.

# Shoes