

Name _____

Number Cards 0 to 12

































0	1	2	3
4	5	6	7
8	9	10	11
12			

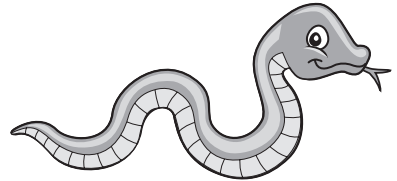
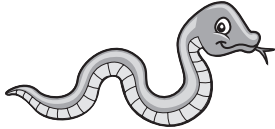
Missing Numbers

The activity area contains two columns of ten number lines each. Each number line has arrows at both ends and a central dot. To the right of each dot is a horizontal tick mark. Below each number line are three vertical lines: a dashed middle line and two solid outer lines, serving as a guide for writing a number.

Number Road Race Recording Sheet

1.				
2.				
3.				
4.				
5.				
6.				
7.				
8.				
9.				
10.				

Growing a Snake

 0

+

=

+

=

+

=

+

=

Spending Money



$$\square \text{¢} - \square \text{¢} = \square \text{¢}$$

$$\square \text{¢} - \square \text{¢} = \square \text{¢}$$

$$\square \text{¢} - \square \text{¢} = \square \text{¢}$$

$$\square \text{¢} - \square \text{¢} = \square \text{¢}$$

Name _____

Money Stories and Number Sentences

=

=

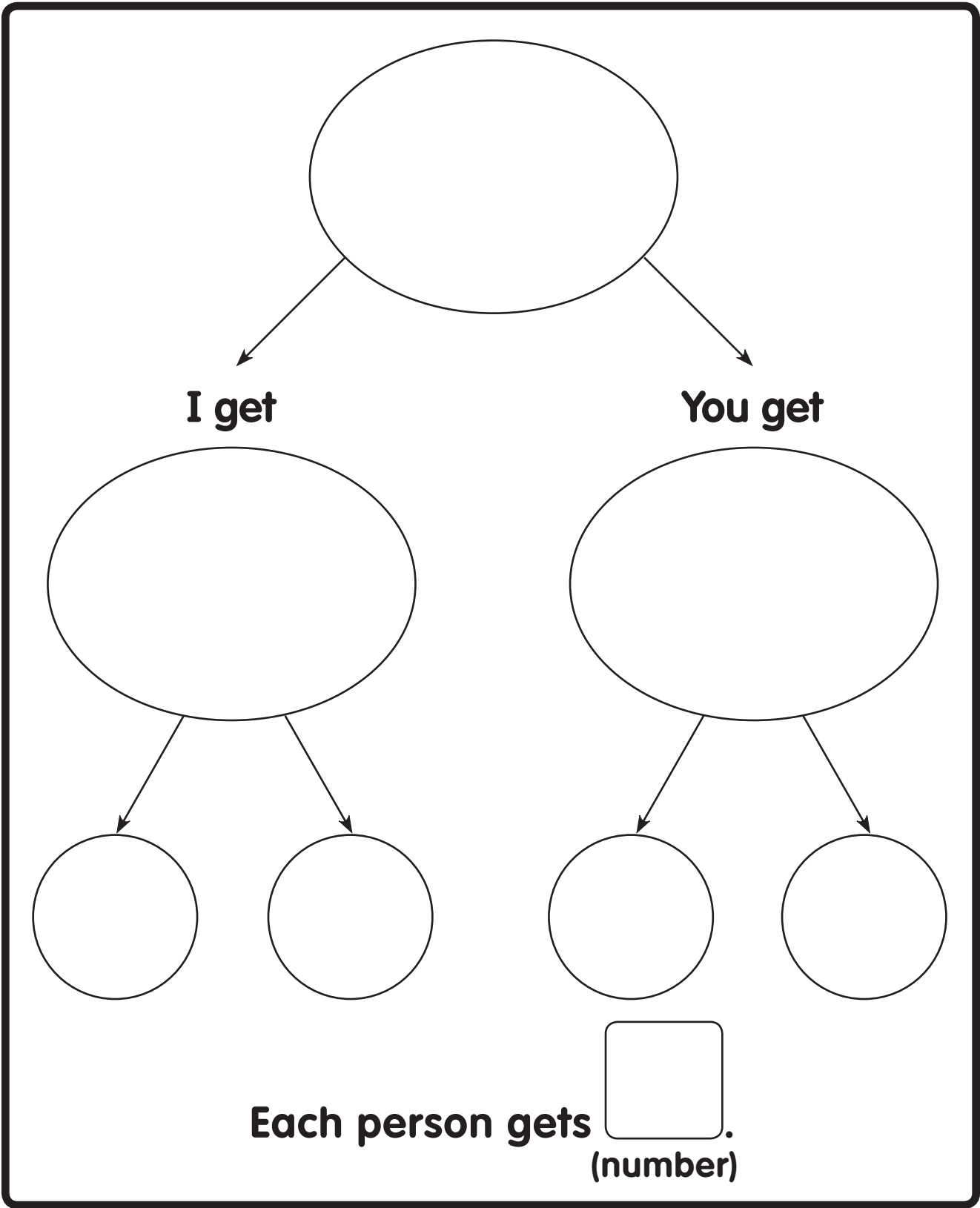
Sharing with a Friend

Total	I Get	You Get	Left Over

Number Road 50 to 100

The number road consists of five parallel lanes. The first lane contains the numbers 90, 91, 92, 93, 94, 95, 96, 97, 98, and 99. The second lane contains 80, 81, 82, 83, 84, 85, 86, 87, 88, and 89. The third lane contains 70, 71, 72, 73, 74, 75, 76, 77, 78, and 79. The fourth lane contains 60, 61, 62, 63, 64, 65, 66, 67, 68, and 69. The fifth lane contains 50, 51, 52, 53, 54, 55, 56, 57, 58, and 59. A house icon is positioned at the 50 mark, and a 100 coin is positioned at the 100 mark. Arrows indicate a path starting from the house at 50, moving right to 60, then up and left to 69, then down and left to 78, then up and left to 87, then down and left to 96, and finally up and left to the 100 coin.

Sharing Among Four People



Number Cards for Large Numbers I



100

50

25

75

10

57

5

52

Number Cards for Large Numbers 2



16

61

19

91

38

83

27

72

Number Cards for Large Numbers 3



8	80
12	21
112	102
101	201

Number Cards for Large Numbers 4



164

461

146

416

614

641

104







106

Name _____

Estimating with Money

Guess	Check	Difference

Which Number Is Closer?

Number	Closer to
 18	 20 or 30
 32	20 or 30
 57	60 or 70
 61	60 or 70
 44	40 or 50

In-Out Table

in	→	out

Three Coins

Shelly has 3 coins.

How many cents might she have?

¢

¢

¢

¢

¢

¢

¢

¢


¢

Coin Maze

Collect 29¢ in the maze.



START



END